

1. Work out $35.7 + 6.73$

42.43

.....
(1 mark)2. Work out $15 - 7.6$

7.4

.....
(1 mark)3. Work out 3.9×23

89.7

.....
(2 marks)4. Work out $\text{£}7.72 \div 4$

£1.93

.....
(1 mark)

5. Round 24.62 to the nearest integer

25

.....
(1 mark)6. Work out $3 + (-14)$

-11

.....
(1 mark)7. What is $\frac{2}{5}$ of 35

14

.....
(1 mark)

8. Find 40% of 140

56

.....
(1 mark)9. Convert $\frac{1}{3}$ to a decimal

0.3

.....
(1 mark)10. Calculate $7^2 - \sqrt{64}$

41

.....
(2 marks)

11. Write down the nth term

4, 8, 12, 16, 20

4n

.....
(1 mark)

12. Simplify

 $\frac{4}{16}$ $\frac{1}{4}$
(1 mark)

13. Simplify $4p + 3w + 2p - 5w$

$6p - 2w$

(2 marks)

14. Simplify $3g \times 6h$

$18gh$

(1 mark)

15. Expand $3(4a - 5)$

$12a - 15$

(2 marks)

16. Write down all the factors of 24

1×24

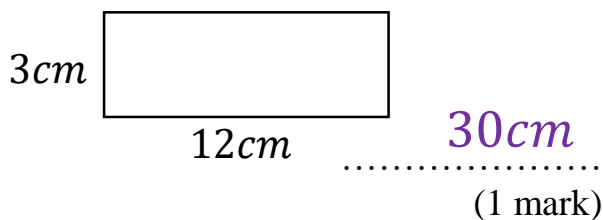
2×12

4×6

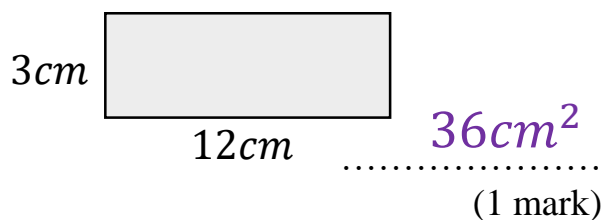
3×8

(1 mark)

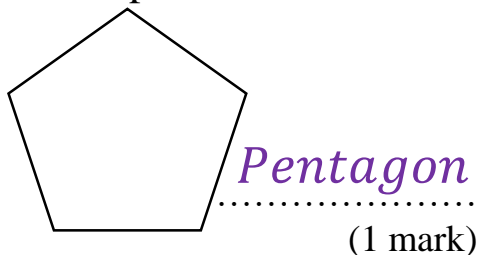
17. Calculate the perimeter



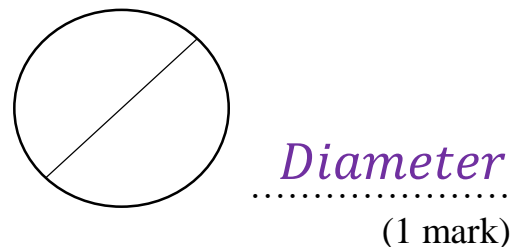
18. Calculate the area



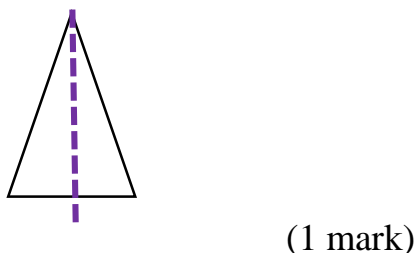
19. Name this shape



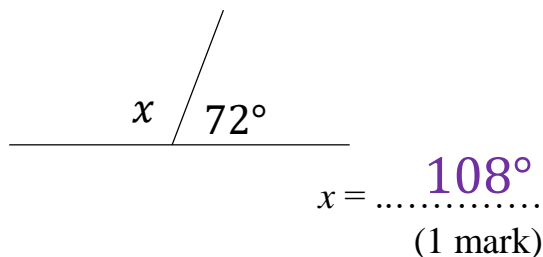
20. Name this part of a circle



21. Draw all the lines of symmetry



22. Calculate x



23. Workout

$4 \times 6 - 5 \times 2$

14

(2 marks)

24. Solve

